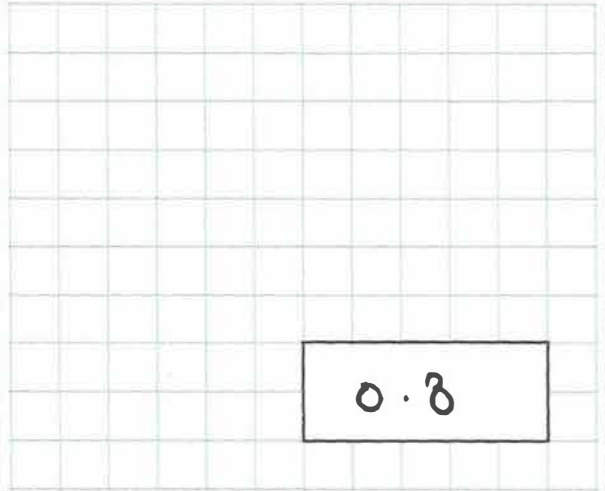


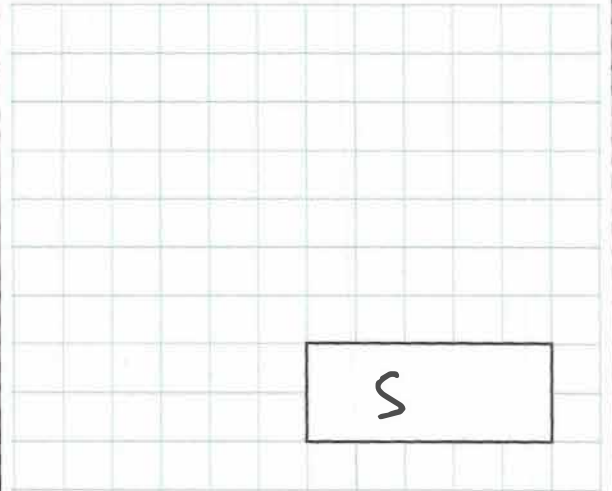
21st October

0.08×10



0.8

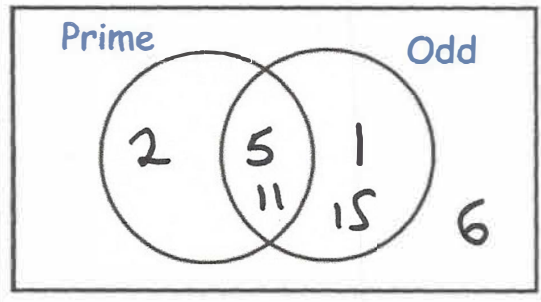
$2\frac{1}{2} = \frac{5}{2}$



5

Write each number in its correct place

- 1 2 6 5 11 15



Here is a quadrilateral on a grid.

The quadrilateral is translated so that point **A** moves to point **B**.

Draw the quadrilateral in its new position.

