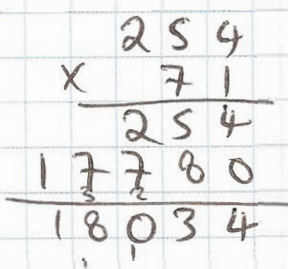
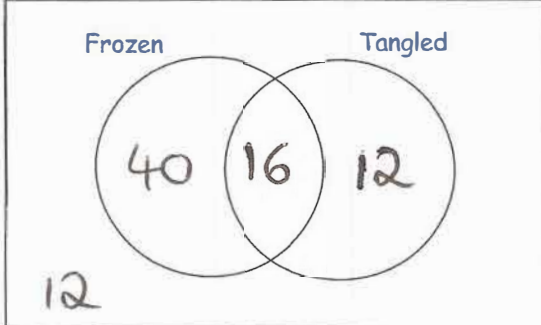
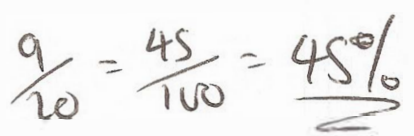


3rd October	
<div style="display: flex; align-items: center; margin-bottom: 10px;"> <div style="text-align: center; margin-right: 10px;"> $\frac{\square}{\square} = 0.875$ </div> <div style="width: 300px; height: 100px; border: 1px solid black; margin-left: 10px;"></div> </div> <div style="border: 1px solid black; width: fit-content; margin-left: auto; margin-right: auto; padding: 5px; text-align: center;"> $\frac{7}{8}$ </div>	<div style="text-align: center; margin-bottom: 10px;"> 71×254 </div> <div style="text-align: center; margin-bottom: 10px;">  </div> <div style="border: 1px solid black; width: fit-content; margin-left: auto; margin-right: auto; padding: 5px; text-align: center;"> 18034 </div>
<p>There are 80 children in Year 6.</p> <p>16 children have watched both the films Frozen and Tangled.</p> <p>28 children have watched Tangled.</p> <p>Twice as many children have watched Frozen than Tangled.</p> <p>How many children have not watched Frozen or Tangled?</p>	<div style="text-align: center; margin-bottom: 10px;">  </div> <div style="margin-left: 20px;"> $28 - 16 = 12$ $2 \times 28 = 56 \quad 56 - 16 = 40$ $40 + 16 + 12 = 68 \quad 80 - 68 = 12$ </div>
<p>What percentage of 20 is 9?</p>	<div style="text-align: center; margin-bottom: 10px;">  </div>