



7th October

$$76 \times 2.3$$

$$\begin{array}{r} 2.3 \\ \times 76 \\ \hline 13.8 \\ 161.0 \\ \hline 174.8 \end{array}$$

174.8

$$15\% \times 680$$

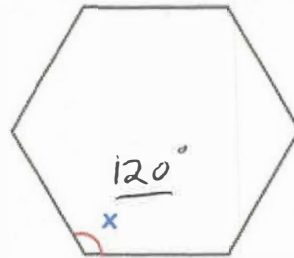
$$\begin{array}{l} 10\% \text{ of } 680 = 68 \\ 5\% \text{ of } 680 = 34 \\ \hline 102 \end{array}$$

102

Here is a regular hexagon

Find the size of each angle

$$720 \div 6 = 120^\circ$$




Chloe is building a fence for her garden.

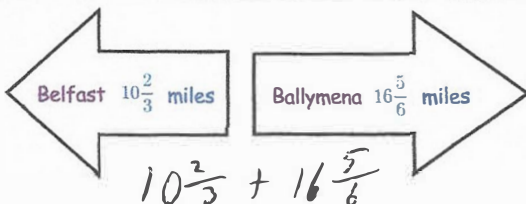
The fence costs £9.25 per metre to build.
The fence is 16 metres long.

Work out the total cost of building the fence

$$\begin{array}{r} 9.25 \\ \times 16 \\ \hline 55.50 \\ 92.50 \\ \hline 148.00 \end{array}$$



£148



Work out the distance from Belfast to Ballymena.

$$\begin{array}{l} \frac{32}{3} + \frac{101}{6} \\ \frac{64}{6} + \frac{101}{6} = \frac{165}{6} \\ 27\frac{3}{6} \end{array}$$

27½ miles