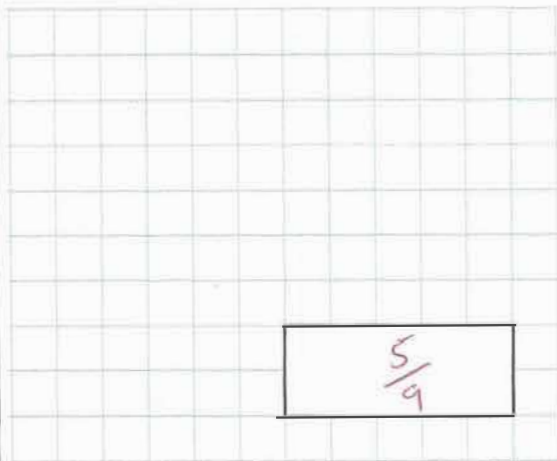




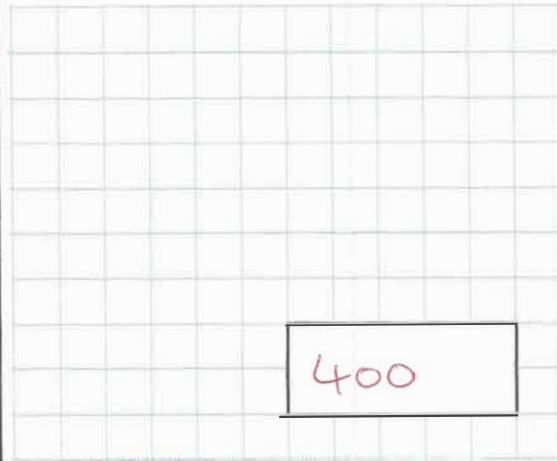
9th September

$$\frac{2}{9} + \frac{3}{9}$$



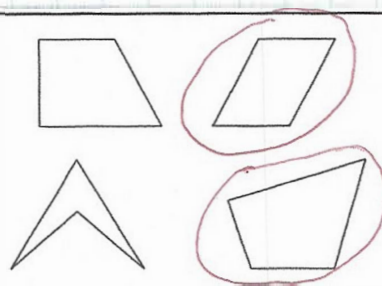
$$\frac{5}{9}$$

$$4,000 \div 10$$



$$400$$

Circle any **quadrilateral** with exactly two obtuse angles



In a shop, 3 apples cost the same as 2 bananas

One apple costs 48p

How much does **one** banana cost?


72p



$$48 \times 3 = 144$$

$$144 \div 2 = 72$$

8 Doughnuts per box



14 Cupcakes per box



Ruby buys 9 boxes of doughnuts  
She buys 10 boxes of cupcakes

Ruby says, "I have twice times as many cupcakes than doughnuts."  
Is she correct?

NO

$$9 \times 8 = 72$$

$$14 \times 10 = 140$$