

Name: Answer

5-a-day

Gold



5th August

Simplify $\frac{16}{24} \div 8 = 2$
 $\frac{24}{24} \div 8 = 3$

$\frac{2}{3}$

$305 \times 1,000$

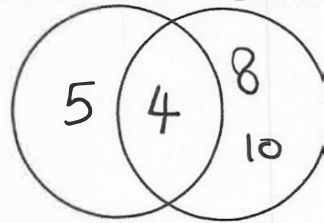
305,000

Put these numbers in the correct place on the diagram

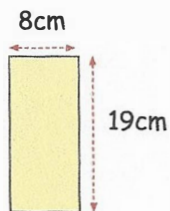
4 5 8 9 10

Numbers under 8

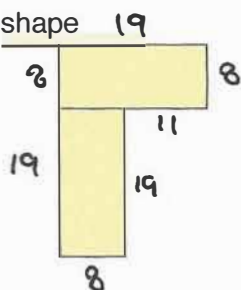
Even numbers



A shape is made from two rectangular tiles like this



This is the shape



Work out the area of the shape

$(8 \times 19) \times 2 = \underline{304 \text{ cm}^2}$

Work out the perimeter of the shape

$\underline{92 \text{ cm}}$