

Name: _____

5-a-day

Silver



1st March

$$3,232 + 800$$



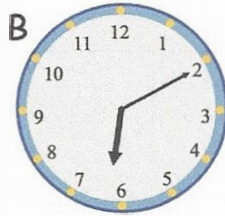
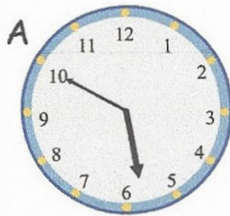
$$\begin{array}{r} 3232 \\ + 800 \\ \hline 4032 \end{array}$$

4032

$$7 \times 56$$

$$\begin{array}{r} 56 \\ \times 7 \\ \hline 392 \end{array}$$

392



Which clock shows 17:30?

D

Which clock shows 18:25?

C

Beth runs 200m on Monday, Tuesday, Wednesday, Thursday and Friday.

How far has she run in total?

Give your answer in kilometres

$$200 \times 5 = 1000m$$

1Km