

Name: _____

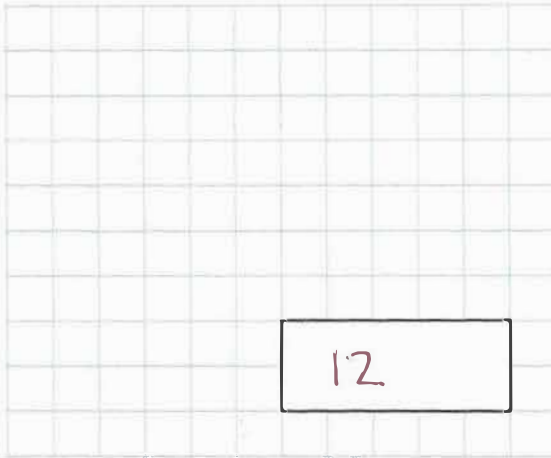
5-a-day

Silver

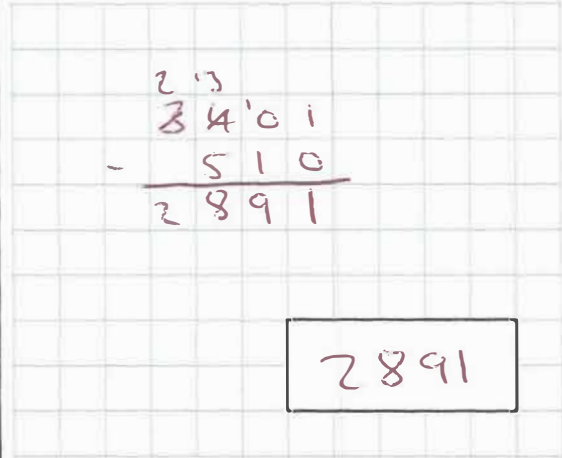


11th March

$$132 \div 11$$



$$3,401 - 510$$

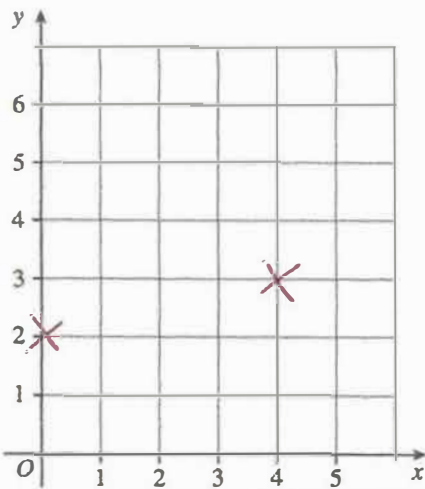


Monday	Tuesday	Wednesday	Thursday
-3°C	-1°C	-6°C	0°C

On what day was the lowest temperature?

Wednesday

Plot the coordinates (0,2) and (4,3)



Reflect the shape in the mirror line

