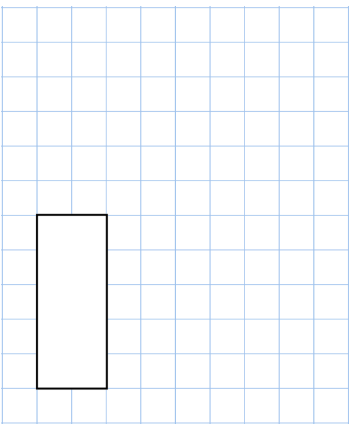
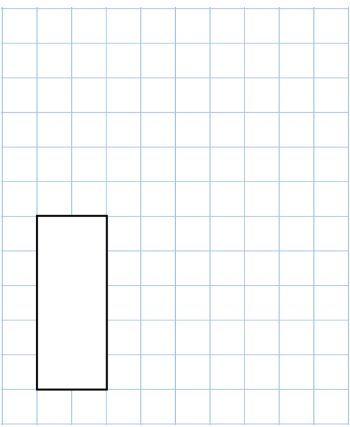
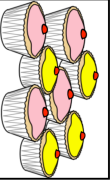
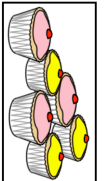



Name: _____

Primary 5-a-day

Bronze



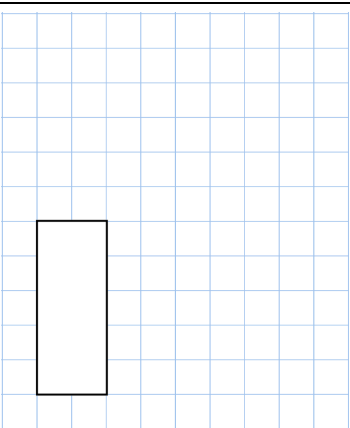
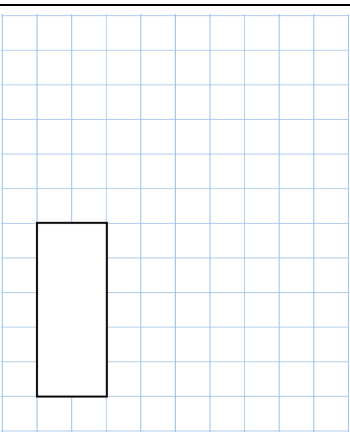
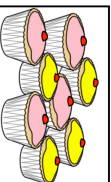
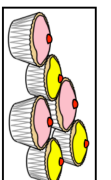
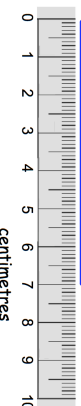
26th April	$434 - 9$	$53 + 18$
		
	<p>A shop sells cupcakes in boxes of 8 and boxes of 6</p>  	<p>Ciara bought 6 boxes of 6 cupcakes</p> <p>How many cupcakes did she get?</p>
	<p>Diane bought some boxes of 8 cupcakes</p> <p>Altogether she has 32 cupcakes</p> <p>How many boxes of 8 did she buy?</p>	
	<p>Madeleine is measuring the length of the blue line.</p> 	<p>How long is the line?</p>

Name: _____

Primary 5-a-day

Bronze



26th April	$434 - 9$	$53 + 18$
		
	<p>A shop sells cupcakes in boxes of 8 and boxes of 6</p>  	<p>Ciara bought 6 boxes of 6 cupcakes</p> <p>How many cupcakes did she get?</p>
	<p>Diane bought some boxes of 8 cupcakes</p> <p>Altogether she has 32 cupcakes</p> <p>How many boxes of 8 did she buy?</p>	
	<p>Madeleine is measuring the length of the blue line.</p> 	<p>How long is the line?</p>