

Name: _____

Primary 5-a-day

Bronze



28th April

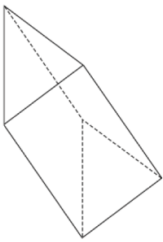
7×7

<input type="text"/>

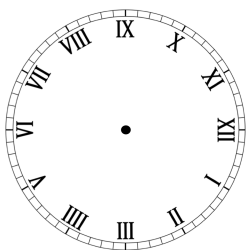
$105 - 60$

<input type="text"/>

How many faces does a triangular prism have?



Show the time 3:45 on the clock



Jenna has £30

Kelly has £7 more than Jenna

How much money do they have in total?

Name: _____

Primary 5-a-day

Bronze



28th April

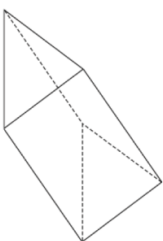
7×7

<input type="text"/>

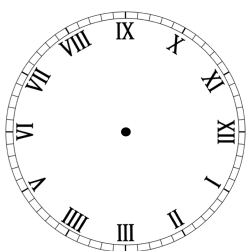
$105 - 60$

<input type="text"/>

How many faces does a triangular prism have?



Show the time 3:45 on the clock



Jenna has £30

Kelly has £7 more than Jenna

How much money do they have in total?