

Name: _____

Primary 5-a-day

Bronze




7th April

$$\begin{array}{r} 45 \\ \times 3 \\ \hline \end{array}$$

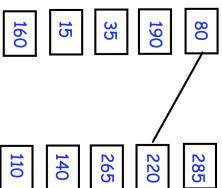


$$106 - 57$$



Draw a pair of parallel lines

Draw lines to join **all the pairs** of number cards that have a **total of 300**



Match each shape to the correct name



Pentagon
Octagon
Heptagon
Triangle

Name: _____

Primary 5-a-day

Bronze




7th April

$$\begin{array}{r} 45 \\ \times 3 \\ \hline \end{array}$$

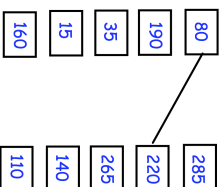


$$106 - 57$$



Draw a pair of parallel lines

Draw lines to join **all the pairs** of number cards that have a **total of 300**



Match each shape to the correct name



Pentagon
Octagon
Heptagon
Triangle