

Name: \_\_\_\_\_

Primary 5-a-day

Bronze

8th April




Double 48

--

$$\begin{array}{r} 17 \\ \times 5 \\ \hline \end{array}$$

--

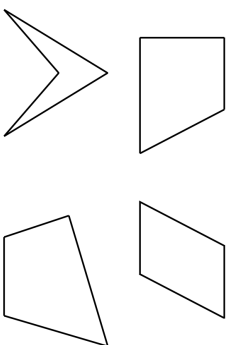
Name this shape



Find the two missing numbers

12 16  24

Tick any shape that has a right angle



Name: \_\_\_\_\_

Primary 5-a-day

Bronze

8th April




Double 48

--

$$\begin{array}{r} 17 \\ \times 5 \\ \hline \end{array}$$

--

Name this shape



Find the two missing numbers

12 16  24

Tick any shape that has a right angle

