

Name: _____

Primary 5-a-day

Bronze

10th August




$48 - 19$

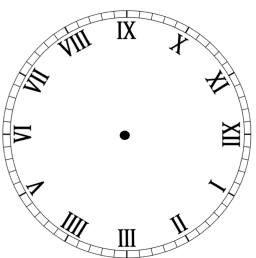
$77 + 33$

On the grid, draw a rectangle

On the grid, draw a pentagon



Show 1:45 on the clock



Name: _____

Primary 5-a-day

Bronze

10th August




$48 - 19$

$77 + 33$

On the grid, draw a rectangle

On the grid, draw a pentagon



Show 1:45 on the clock

