

Name: \_\_\_\_\_

Primary 5-a-day

Bronze

11th August



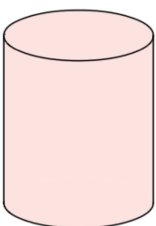
$$34 \div 2$$

Grid for calculation

$$2 \times 2 \times 3 \times 3$$

Grid for calculation

Name this 3D shape



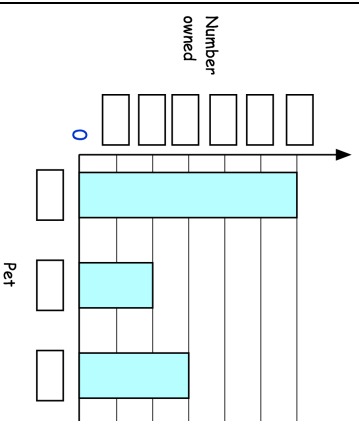
Alice collected information about the pets her friends owned.

Here are her results

Pet	Number owned
Dog	4
Cat	12
Rabbit	6

The bar chart shows the information from the table

Fill in **all** the missing labels



Name: \_\_\_\_\_

Primary 5-a-day

Bronze

11th August



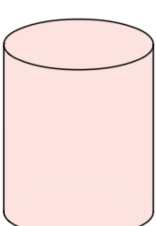
$$34 \div 2$$

Grid for calculation

$$2 \times 2 \times 3 \times 3$$

Grid for calculation

Name this 3D shape



Alice collected information about the pets her friends owned.

Here are her results

Pet	Number owned
Dog	4
Cat	12
Rabbit	6

The bar chart shows the information from the table

Fill in **all** the missing labels

