



18th August

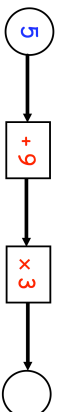
$$134 - 64$$

--

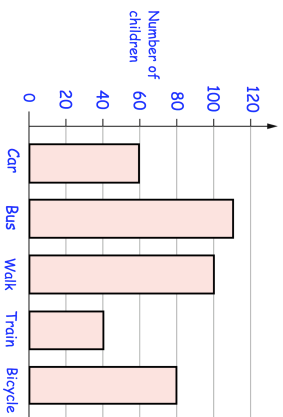
$$52 \div 2$$

--

Find the missing number



The bar chart shows how children at a primary school travelled to school each morning



How many children travelled to school by **car**?

How many **more** children travelled to school by **bus** than by **train**?



18th August

$$134 - 64$$

--

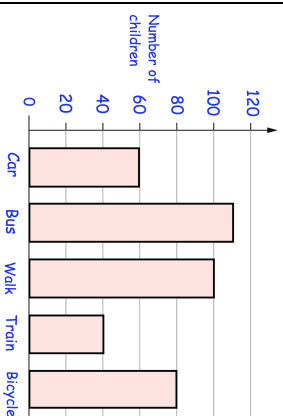
$$52 \div 2$$

--

Find the missing number



The bar chart shows how children at a primary school travelled to school each morning



How many children travelled to school by **car**?

How many **more** children travelled to school by **bus** than by **train**?