

Name: _____

Primary 5-a-day

Bronze



19th August

30×30

--

$1,000 - 10$

--

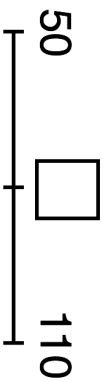
Harper has **four** coins

He has £1.10

Write what the four coins could be

<input type="text"/>	<input type="text"/>	<input type="text"/>	<input type="text"/>
----------------------	----------------------	----------------------	----------------------

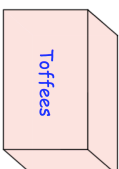
What number is **halfway between** 50 and 110?



Alexandra has a box of toffees.

She has 8 friends.
She gives them 5 toffees each.
There are 7 toffees left.

How many toffees were in the box at the start?



Name: _____

Primary 5-a-day

Bronze



19th August

30×30

--

$1,000 - 10$

--

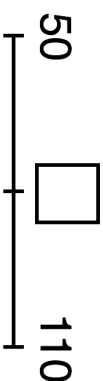
Harper has **four** coins

He has £1.10

Write what the four coins could be

<input type="text"/>	<input type="text"/>	<input type="text"/>	<input type="text"/>
----------------------	----------------------	----------------------	----------------------

What number is **halfway between** 50 and 110?



Alexandra has a box of toffees.

She has 8 friends.
She gives them 5 toffees each.
There are 7 toffees left.

How many toffees were in the box at the start?

