

Name: _____

Primary 5-a-day

Bronze

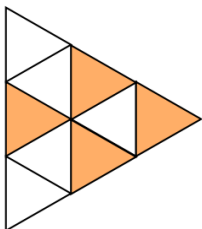


20th August

$$\begin{array}{r} 49 \\ + 23 \\ \hline \end{array}$$

What fraction of this shape is shaded?

$$\begin{array}{r} 354 \\ \hline \end{array}$$



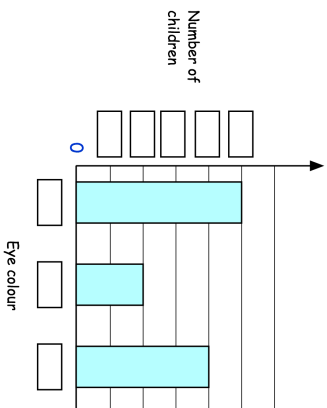
Alice collected information about her friends' eye colour.

Here are her results

Eye Colour	Number of Children
Brown	8
Blue	10
Green	4

The bar chart shows the information from the table

Fill in **all** the missing labels



Name: _____

Primary 5-a-day

Bronze

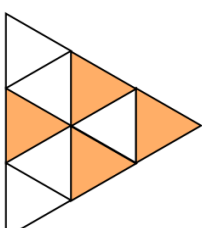


20th August

$$\begin{array}{r} 49 \\ + 23 \\ \hline \end{array}$$

What fraction of this shape is shaded?

$$\begin{array}{r} 354 \\ \hline \end{array}$$



Alice collected information about her friends' eye colour.

Here are her results

Eye Colour	Number of Children
Brown	8
Blue	10
Green	4

The bar chart shows the information from the table

Fill in **all** the missing labels

