

Name: \_\_\_\_\_

Primary 5-a-day

Bronze



24th August

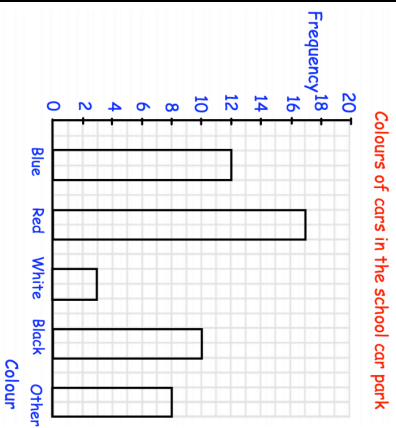
$$900 - 60$$

<input type="text"/>
----------------------

$$4 \times 26$$

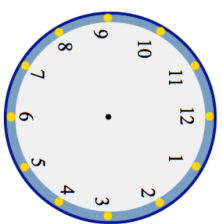
<input type="text"/>
----------------------

What is the most common colour of car?



How many more cars were blue than black?

Show the time **five past two** on the clock



Name: \_\_\_\_\_

Primary 5-a-day

Bronze



24th August

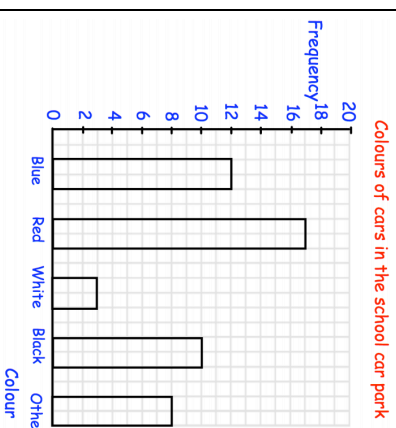
$$900 - 60$$

<input type="text"/>
----------------------

$$4 \times 26$$

<input type="text"/>
----------------------

What is the most common colour of car?



How many more cars were blue than black?

Show the time **five past two** on the clock

