

Name: _____

Primary 5-a-day

Bronze

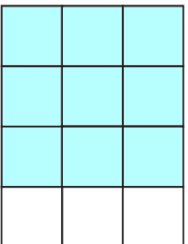


29th August

$$2 \times 2 \times 2 \times 2$$

$$265 + 45$$

What fraction of this shape is shaded?



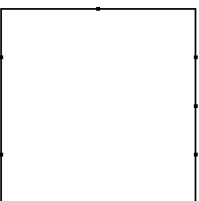
Henry is paid £10 an hour.

In one week he is paid £160

How many hours did Henry work?

This square has some dots on its sides

Join two dots to divide the square into **two equal parts**.



Name: _____

Primary 5-a-day

Bronze

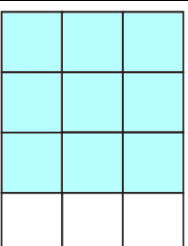


29th August

$$2 \times 2 \times 2 \times 2$$

$$265 + 45$$

What fraction of this shape is shaded?



Henry is paid £10 an hour.

In one week he is paid £160

How many hours did Henry work?

This square has some dots on its sides

Join two dots to divide the square into **two equal parts**.

