

Name: _____

Primary 5-a-day

Bronze



30th August

$21 \div 7$

Grid area for the first problem, containing a blank rectangular box for the answer.

$55 + 34 + 11$

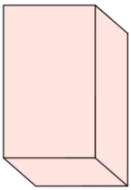
Grid area for the second problem, containing a blank rectangular box for the answer.

Isabelle is making a tally chart.

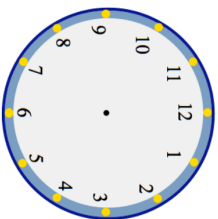
Finish the tally chart for her.

Day	Tally	Frequency
Monday	### ### II	12
Tuesday		
Wednesday		7
Thursday	## ## ## ##	
Friday		10

How many **vertices** does a cuboid have?



Show **half past nine** on the clock



Name: _____

Primary 5-a-day

Bronze



30th August

$21 \div 7$

Grid area for the first problem, containing a blank rectangular box for the answer.

$55 + 34 + 11$

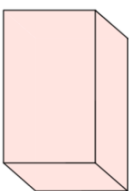
Grid area for the second problem, containing a blank rectangular box for the answer.

Isabelle is making a tally chart.

Finish the tally chart for her.

Day	Tally	Frequency
Monday	### ### II	12
Tuesday		
Wednesday		7
Thursday	## ## ## ##	
Friday		10

How many **vertices** does a cuboid have?



Show **half past nine** on the clock

