

Name: _____

Primary 5-a-day

Bronze



31st August


$$30 \div 6$$

<input type="text"/>

$$8 \times 0$$

<input type="text"/>

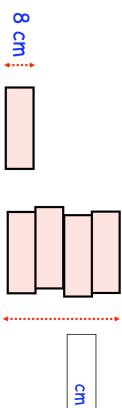
How many days are there in September?



A wooden block is 8cm tall

Jonah makes a tower using 4 blocks.

How tall is the tower?



Vicky has 100 cupcakes.

Vicky gives 64 cupcakes to her brother.

She then shares the rest of the cupcakes equally between her two friends, Megan and Jack.

How many cupcakes did Megan get?

31st August


$$30 \div 6$$

<input type="text"/>

$$8 \times 0$$

<input type="text"/>

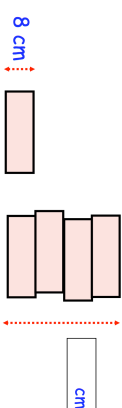
How many days are there in September?



A wooden block is 8cm tall

Jonah makes a tower using 4 blocks.

How tall is the tower?



Vicky has 100 cupcakes.

Vicky gives 64 cupcakes to her brother.

She then shares the rest of the cupcakes equally between her two friends, Megan and Jack.

How many cupcakes did Megan get?

Name: _____

Primary 5-a-day

Bronze

