

Name: \_\_\_\_\_

Primary 5-a-day

Bronze



4th August


$$155 - 30$$

<input type="text"/>
----------------------

$$9 \times 3$$

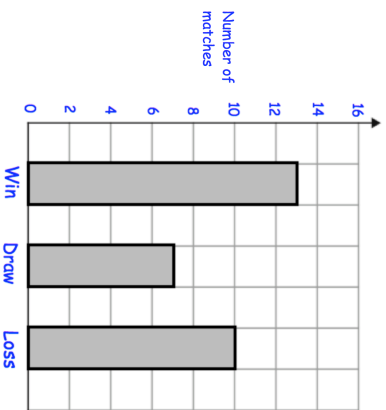
<input type="text"/>
----------------------

How many days are there in April?



Bolton Rovers play some football matches

The results are shown in this bar chart



How many matches did they **lose**?

How many more matches did they **win** than **draw**?

Name: \_\_\_\_\_

Primary 5-a-day

Bronze



4th August

$$155 - 30$$

<input type="text"/>
----------------------

$$9 \times 3$$

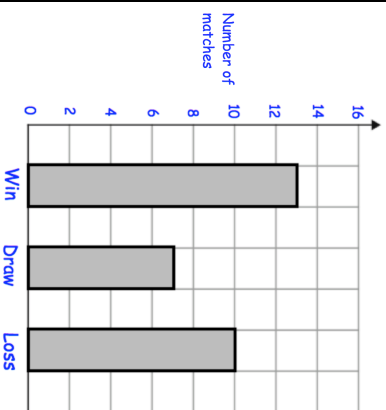
<input type="text"/>
----------------------

How many days are there in April?



Bolton Rovers play some football matches

The results are shown in this bar chart



How many matches did they **lose**?

How many more matches did they **win** than **draw**?