



Name: _____

Primary 5-a-day

Bronze





6th August	
20×20	$75 \div 5$
<p>Draw a 4cm line</p> 	
<p>Jack has these digit cards</p> <p>2 5 7 8</p> <p>He makes a 2-digit number and a 1-digit number. He adds them together. His answer is a multiple of 5</p>	<p>What could Jack's addition be?</p> <p><input type="text"/> + <input type="text"/></p>
<p>The children at Highfield School are collecting money for charity. Their target is £200 So far they have collected £115</p>	<p>How much more money do they need to reach their target?</p>

Name: _____

Primary 5-a-day

Bronze



6th August	
20×20	$75 \div 5$
<p>Draw a 4cm line</p> 	
<p>Jack has these digit cards</p> <p>2 5 7 8</p> <p>He makes a 2-digit number and a 1-digit number. He adds them together. His answer is a multiple of 5</p>	<p>What could Jack's addition be?</p> <p><input type="text"/> + <input type="text"/></p>
<p>The children at Highfield School are collecting money for charity. Their target is £200 So far they have collected £115</p>	<p>How much more money do they need to reach their target?</p>