

Name: _____

Primary 5-a-day

Bronze



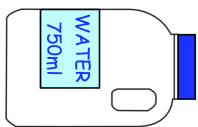
7th August

$$1,200 + 500$$

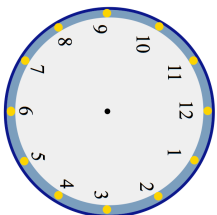
<p>A group of friends earn £44 by cutting grass. They share the money equally. They get £11 each. How many friends are in the group?</p>	<p>A bottle of water holds 750 millilitres 500 millilitres of water is poured out How much water is left?</p>
---	---

$$62 - 18$$

<p>A group of friends earn £44 by cutting grass. They share the money equally. They get £11 each. How many friends are in the group?</p>	<p>A bottle of water holds 750 millilitres 500 millilitres of water is poured out How much water is left?</p>
---	---



Megan finishes school at 3:00pm
She gets home 30 minutes later
Show the time Megan gets home on the clock



Name: _____

Primary 5-a-day

Bronze



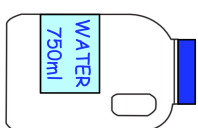
7th August

$$1,200 + 500$$

<p>A group of friends earn £44 by cutting grass. They share the money equally. They get £11 each. How many friends are in the group?</p>	<p>A bottle of water holds 750 millilitres 500 millilitres of water is poured out How much water is left?</p>
---	---

$$62 - 18$$

<p>A group of friends earn £44 by cutting grass. They share the money equally. They get £11 each. How many friends are in the group?</p>	<p>A bottle of water holds 750 millilitres 500 millilitres of water is poured out How much water is left?</p>
---	---



Megan finishes school at 3:00pm
She gets home 30 minutes later
Show the time Megan gets home on the clock

