

Name: \_\_\_\_\_

Primary 5-a-day

Bronze

1st December



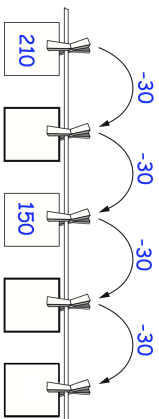
$$60 + 70$$

<div style="background-color: #e0e0e0; width: 100%; height: 100%;"></div>
<input style="width: 100%; height: 20px;" type="text"/>

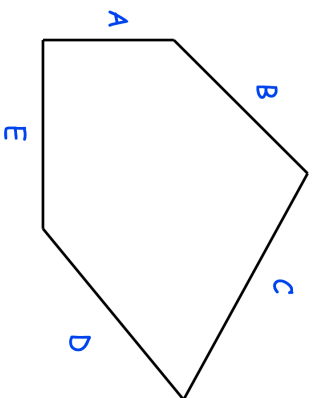
$$36 \div 9$$

<div style="background-color: #e0e0e0; width: 100%; height: 100%;"></div>
<input style="width: 100%; height: 20px;" type="text"/>

Write in the missing numbers



Which side of the shape is the longest?



Which two sides have the same length?

Name: \_\_\_\_\_

Primary 5-a-day

Bronze

1st December



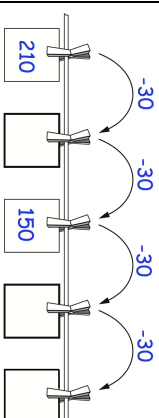
$$60 + 70$$

<div style="background-color: #e0e0e0; width: 100%; height: 100%;"></div>
<input style="width: 100%; height: 20px;" type="text"/>

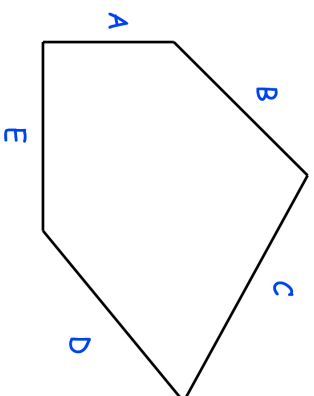
$$36 \div 9$$

<div style="background-color: #e0e0e0; width: 100%; height: 100%;"></div>
<input style="width: 100%; height: 20px;" type="text"/>

Write in the missing numbers



Which side of the shape is the longest?



Which two sides have the same length?