

Name: \_\_\_\_\_

Primary 5-a-day

Bronze

10th December



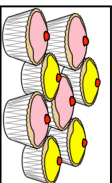
$$75 + 13$$

<input type="text"/>

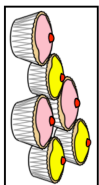
$$\begin{array}{r} 3 \\ \hline 72 \end{array}$$

<input type="text"/>

A shop sells cupcakes in **boxes of 8** and **boxes of 6**



Box of 8 cupcakes



Box of 6 cupcakes

Ciara bought **6 boxes of 6 cupcakes**

How many cupcakes did she get?

Diane bought some **boxes of 8 cupcakes**

Altogether she has **32 cupcakes**

How many **boxes of 8** did she buy?

Write **two numbers**, each **greater than 50**, to complete this subtraction

$$\begin{array}{|c|} \hline \square \\ \hline \end{array} - \begin{array}{|c|} \hline \square \\ \hline \end{array} = 37$$

Name: \_\_\_\_\_

Primary 5-a-day

Bronze

10th December



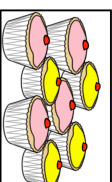
$$75 + 13$$

<input type="text"/>

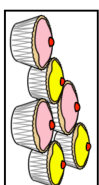
$$\begin{array}{r} 3 \\ \hline 72 \end{array}$$

<input type="text"/>

A shop sells cupcakes in **boxes of 8** and **boxes of 6**



Box of 8 cupcakes



Box of 6 cupcakes

Ciara bought **6 boxes of 6 cupcakes**

How many cupcakes did she get?

Diane bought some **boxes of 8 cupcakes**

Altogether she has **32 cupcakes**

How many **boxes of 8** did she buy?

Write **two numbers**, each **greater than 50**, to complete this subtraction

$$\begin{array}{|c|} \hline \square \\ \hline \end{array} - \begin{array}{|c|} \hline \square \\ \hline \end{array} = 37$$