

Name: _____

Primary 5-a-day

Bronze



12th December

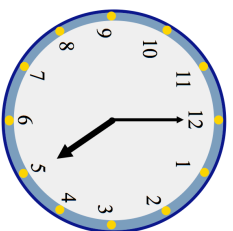
$323 - 7$

$54 + 16$

Grid for calculation $323 - 7$

Grid for calculation $54 + 16$

What time is shown on the clock?



These are the opening times at a village library

opening times	
Monday	5pm to 8pm
Tuesday	closed
Wednesday	9am to 6pm
Thursday	7am to 10am
Friday	9am to 10am
Saturday	8am to 11am
Sunday	closed

On which day does the library close at 6pm?

On which day is the library only open for one hour?

12th December

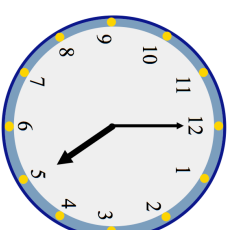
$323 - 7$

$54 + 16$

Grid for calculation $323 - 7$

Grid for calculation $54 + 16$

What time is shown on the clock?



These are the opening times at a village library

opening times	
Monday	5pm to 8pm
Tuesday	closed
Wednesday	9am to 6pm
Thursday	7am to 10am
Friday	9am to 10am
Saturday	8am to 11am
Sunday	closed

On which day does the library close at 6pm?

On which day is the library only open for one hour?

Name: _____

Primary 5-a-day

Bronze



12th December

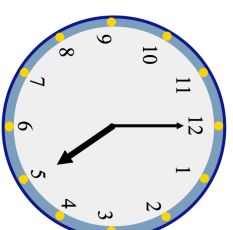
$323 - 7$

$54 + 16$

Grid for calculation $323 - 7$

Grid for calculation $54 + 16$

What time is shown on the clock?



These are the opening times at a village library

opening times	
Monday	5pm to 8pm
Tuesday	closed
Wednesday	9am to 6pm
Thursday	7am to 10am
Friday	9am to 10am
Saturday	8am to 11am
Sunday	closed

On which day does the library close at 6pm?

On which day is the library only open for one hour?