

Name: _____

Primary 5-a-day

Bronze

15th December



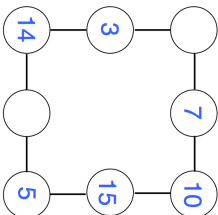
6×0

<input type="text"/>

$55 + 30 = 100 - \square$

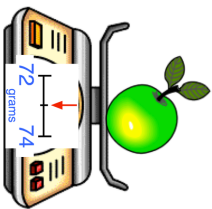
<input type="text"/>

In the diagram, three circles in a straight line **add to 30**.

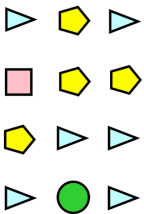


Write in the missing numbers.

Write down the mass of the apple



Complete the tally chart



Shape	Tally
Circle	
Pentagon	
Square	
Triangle	

Name: _____

Primary 5-a-day

Bronze

15th December



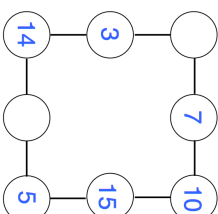
6×0

<input type="text"/>

$55 + 30 = 100 - \square$

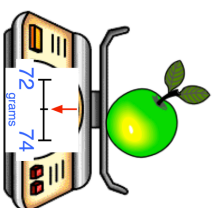
<input type="text"/>

In the diagram, three circles in a straight line **add to 30**.

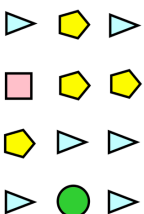


Write in the missing numbers.

Write down the mass of the apple



Complete the tally chart



Shape	Tally
Circle	
Pentagon	
Square	
Triangle	