
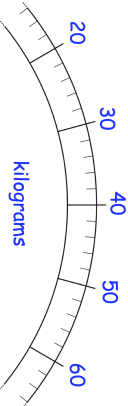


Name: _____

Primary 5-a-day

Bronze




<p>2nd December</p>	
$60 - 13$	20×5
<p>54 children get on a bus 28 of them are boys. How many are girls?</p>	
<p>The bus leaves school at this time</p> <p>8 : 30</p> <p>It gets back to school one and a half hours later</p>	<p>At what time does it get back?</p> <p>: </p>
<p>Chloe weighs 40kg David weighs 2kg less than Chloe Draw an arrow on the scale to show how much David weighs</p>	

Name: _____

Primary 5-a-day

Bronze



<p>2nd December</p>	
$60 - 13$	20×5
<p>54 children get on a bus 28 of them are boys. How many are girls?</p>	
<p>The bus leaves school at this time</p> <p>8 : 30</p> <p>It gets back to school one and a half hours later</p>	<p>At what time does it get back?</p> <p>: </p>
<p>Chloe weighs 40kg David weighs 2kg less than Chloe Draw an arrow on the scale to show how much David weighs</p>	