

Name: _____

Primary 5-a-day

Bronze

27th December



$\frac{1}{3}$ of 24

--

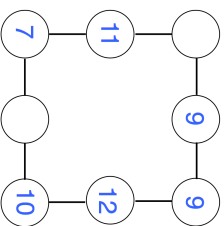
$70 - 18$

--

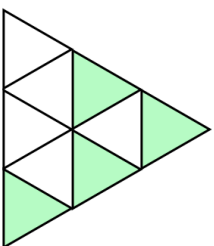
Draw a right angle

In the diagram, three circles in a straight line **add to 31**.

Write in the missing numbers.



What fraction of this shape is shaded?



Name: _____

Primary 5-a-day

Bronze

27th December



$\frac{1}{3}$ of 24

--

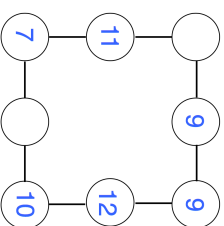
$70 - 18$

--

Draw a right angle

In the diagram, three circles in a straight line **add to 31**.

Write in the missing numbers.



What fraction of this shape is shaded?

