

Name: _____

Primary 5-a-day

Bronze

31st December



100×8

$256 - 27$

<input type="text"/>

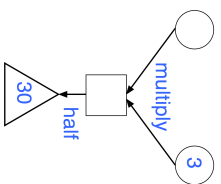
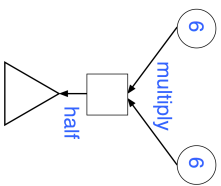
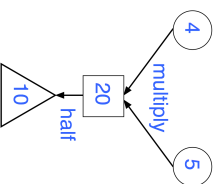
<input type="text"/>

How many days are there in June?



In the diagram, the numbers in the circles are multiplied together to make the number in the square.

The number in the triangle is half the number in the square.



Name: _____

Primary 5-a-day

Bronze

31st December



100×8

$256 - 27$

<input type="text"/>

<input type="text"/>

How many days are there in June?



In the diagram, the numbers in the circles are multiplied together to make the number in the square.

The number in the triangle is half the number in the square.

