

Name: _____

Primary 5-a-day

Bronze



9th December

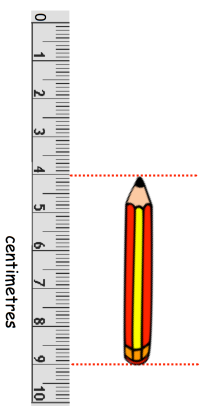
$$4 \times 5 \times 2$$

$$\frac{1}{3} \text{ of } 15$$

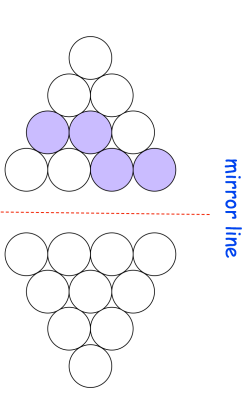
Grid for calculation

Grid for calculation

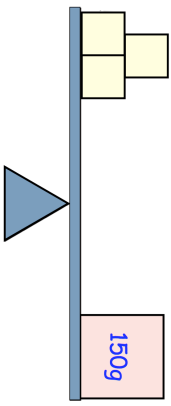
How long is the pencil?



Complete the reflection of this pattern in the mirror line



How much does one yellow block weigh?



Name: _____

Primary 5-a-day

Bronze



9th December

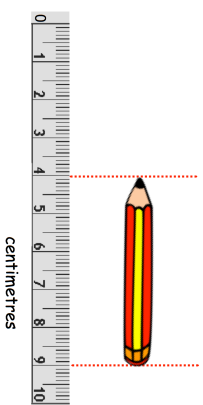
$$4 \times 5 \times 2$$

$$\frac{1}{3} \text{ of } 15$$

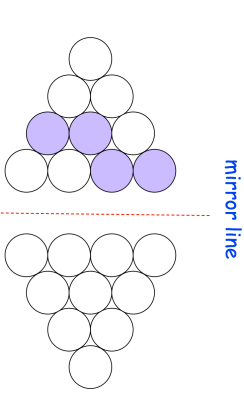
Grid for calculation

Grid for calculation

How long is the pencil?



Complete the reflection of this pattern in the mirror line



How much does one yellow block weigh?

