

Name: _____

Primary 5-a-day


Bronze

1st July

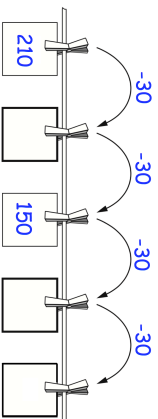
$$\begin{array}{r} 93 \\ - 34 \\ \hline \end{array}$$

$$\begin{array}{r} 570 \\ \hline \end{array}$$

How many days are there in July?



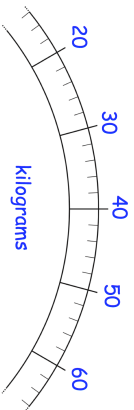
Write in the missing numbers



Chloe weighs 28kg

David weighs 26kg more than Chloe

Draw an arrow on the scale to show how much David weighs



Name: _____

Primary 5-a-day


Bronze

1st July

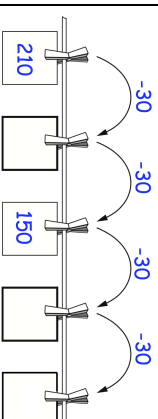
$$\begin{array}{r} 93 \\ - 34 \\ \hline \end{array}$$

$$\begin{array}{r} 570 \\ \hline \end{array}$$

How many days are there in July?



Write in the missing numbers



Chloe weighs 28kg

David weighs 26kg more than Chloe

Draw an arrow on the scale to show how much David weighs

