

Name: \_\_\_\_\_

Primary 5-a-day

Bronze

10th July

56 – 9

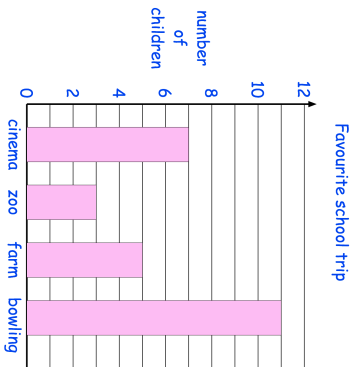
145 – 50

<input type="text"/>
----------------------

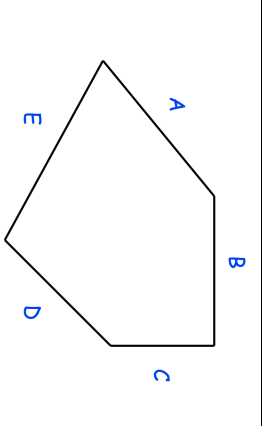
<input type="text"/>
----------------------

The children in a class vote for their favourite school trip. Each child voted once.

How many **more** children voted for **bowling** than for the **zoo**?



How many children voted **altogether**?



Two sides of this shape are the same length.  
Write their letters.

Name: \_\_\_\_\_

Primary 5-a-day

Bronze

10th July

56 – 9

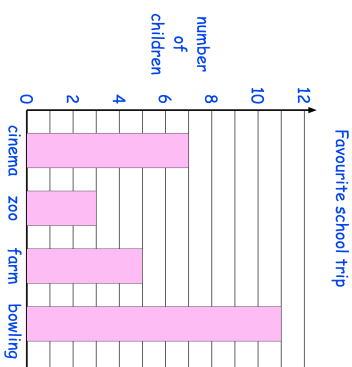
145 – 50

<input type="text"/>
----------------------

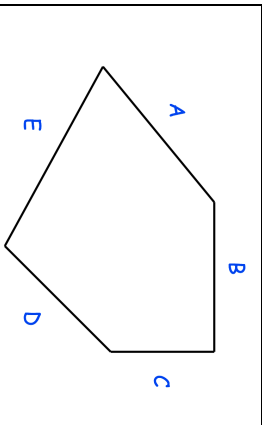
<input type="text"/>
----------------------

The children in a class vote for their favourite school trip. Each child voted once.

How many **more** children voted for **bowling** than for the **zoo**?



How many children voted **altogether**?



Two sides of this shape are the same length.  
Write their letters.