

Name: \_\_\_\_\_

Primary 5-a-day

Bronze



14th July

$$5 + 109$$

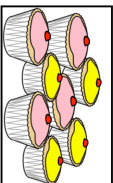
$$60 \times 2$$

<input type="text"/>

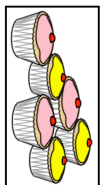
<input type="text"/>

A shop sells cupcakes in **boxes of 8** and **boxes of 6**

Taylor bought **7 boxes of 6 cupcakes**  
How many cupcakes did she get?



Box of 8 cupcakes



Box of 6 cupcakes

Leah bought some **boxes of 8 cupcakes**

Altogether she has **40 cupcakes**

How many **boxes of 8** did she buy?

Draw a 6cm line

Name: \_\_\_\_\_

Primary 5-a-day

Bronze



14th July

$$5 + 109$$

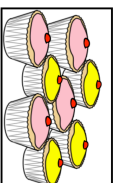
$$60 \times 2$$

<input type="text"/>

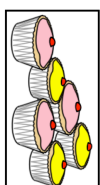
<input type="text"/>

A shop sells cupcakes in **boxes of 8** and **boxes of 6**

Taylor bought **7 boxes of 6 cupcakes**  
How many cupcakes did she get?



Box of 8 cupcakes



Box of 6 cupcakes

Leah bought some **boxes of 8 cupcakes**

Altogether she has **40 cupcakes**

How many **boxes of 8** did she buy?

Draw a 6cm line