

Name: _____

Primary 5-a-day

Bronze



17th July

$$4 \times 4$$

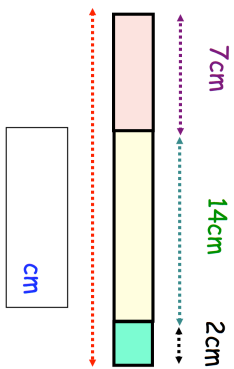
--

$$135 - 40$$

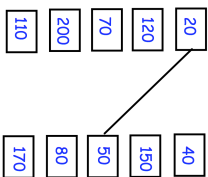
--

Vicky put a pink block, yellow block and blue block beside each other

Work out the total length



Draw lines to join **all the pairs** of number cards that have a **difference of 30**



Draw a horizontal line

Draw a vertical line

Name: _____

Primary 5-a-day

Bronze



17th July

$$4 \times 4$$

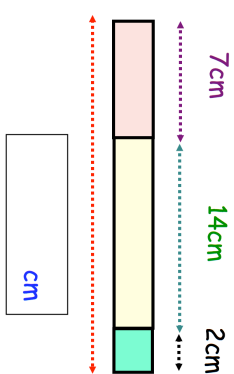
--

$$135 - 40$$

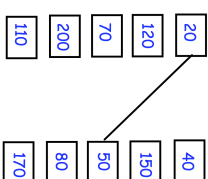
--

Vicky put a pink block, yellow block and blue block beside each other

Work out the total length



Draw lines to join **all the pairs** of number cards that have a **difference of 30**



Draw a horizontal line

Draw a vertical line