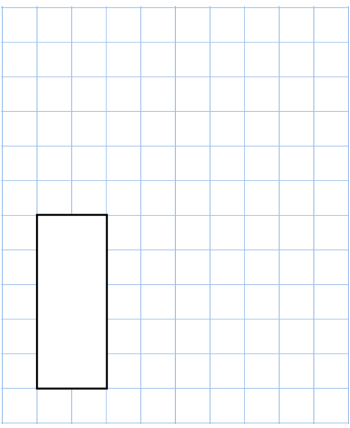
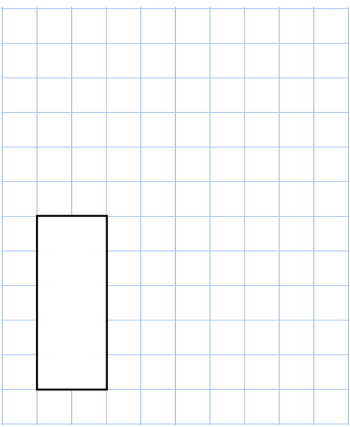


Name: _____

Primary 5-a-day

Bronze



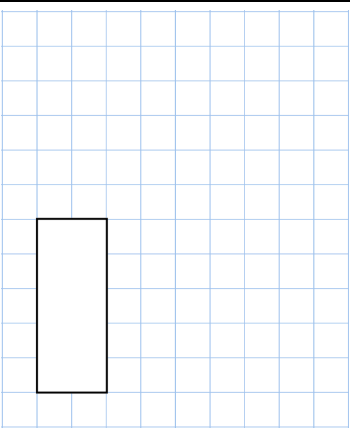
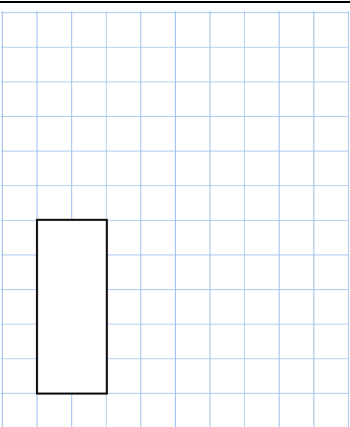
24th July $17 + 74$  <input type="text"/>	26×3  <input type="text"/>
Lauren puts these five numbers in their correct place on a number line. 308 291 305 296 307	Write the number closest to 300
Chair £70 Sofa £200 Table £250 Rebecca buys 3 chairs and a sofa	Work out the total cost
Find the missing numbers to make the addition correct.	$\begin{array}{r} \square 6 \\ + 3 \square \\ \hline 91 \end{array}$

Name: _____

Primary 5-a-day

Bronze



24th July $17 + 74$  <input type="text"/>	26×3  <input type="text"/>
Lauren puts these five numbers in their correct place on a number line. 308 291 305 296 307	Write the number closest to 300
Chair £70 Sofa £200 Table £250 Rebecca buys 3 chairs and a sofa	Work out the total cost
Find the missing numbers to make the addition correct.	$\begin{array}{r} \square 6 \\ + 3 \square \\ \hline 91 \end{array}$