



Name: \_\_\_\_\_

Primary 5-a-day

Bronze





<p><b>14th June</b></p> <p><math>8 \times 1 \times 6</math></p> <p>4 pens cost £1</p> <p>Find the cost of 1 pen</p>  <p>Rosie does her maths and science homework. It takes her a total of <b>two hours</b> She spends <b>70</b> minutes doing her maths homework.</p> <p>Sam buys two glasses of lemonade. Each glass costs £1.30 Sam pays with a £5 note How much <b>change</b> will he get?</p>	<p><math>6,000 - 40</math></p> <p>How many <b>minutes</b> does she spend doing her science homework?</p> 
---	--

Name: \_\_\_\_\_

Primary 5-a-day

Bronze



<p><b>14th June</b></p> <p><math>8 \times 1 \times 6</math></p> <p>4 pens cost £1</p> <p>Find the cost of 1 pen</p>  <p>Rosie does her maths and science homework. It takes her a total of <b>two hours</b> She spends <b>70</b> minutes doing her maths homework.</p> <p>Sam buys two glasses of lemonade. Each glass costs £1.30 Sam pays with a £5 note How much <b>change</b> will he get?</p>	<p><math>6,000 - 40</math></p> <p>How many <b>minutes</b> does she spend doing her science homework?</p> 
---	--