

Name: \_\_\_\_\_

Primary 5-a-day

Bronze



3rd June

$$44 \div 4$$

<input type="text"/>
----------------------

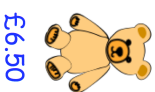
$$30 \times 30$$

<input type="text"/>
----------------------

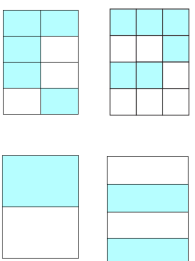
Laura wants to buy a teddy bear.

She has £2

How much more money does she need?



Circle the shape that is **not**  $\frac{1}{2}$  shaded



Lindsey has written down a three-digit number

?	?	?
---	---	---

All the digits are odd  
The digits add up to 25

What could her number be?

<input type="text"/>	<input type="text"/>	<input type="text"/>
----------------------	----------------------	----------------------

Name: \_\_\_\_\_

Primary 5-a-day

Bronze



3rd June

$$44 \div 4$$

<input type="text"/>
----------------------

$$30 \times 30$$

<input type="text"/>
----------------------

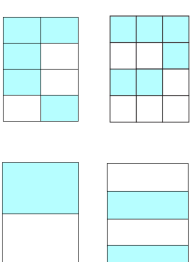
Laura wants to buy a teddy bear.

She has £2

How much more money does she need?



Circle the shape that is **not**  $\frac{1}{2}$  shaded



Lindsey has written down a three-digit number

?	?	?
---	---	---

All the digits are odd  
The digits add up to 25

What could her number be?

<input type="text"/>	<input type="text"/>	<input type="text"/>
----------------------	----------------------	----------------------