

Name: \_\_\_\_\_

Primary 5-a-day

Bronze



4th June

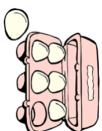
$$379 - 200$$

<input type="text"/>
----------------------

$$75 + 35$$

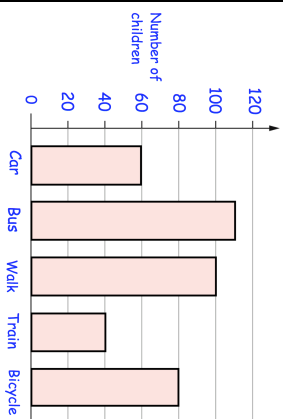
<input type="text"/>
----------------------

Andrew is putting eggs into cartons  
Each carton holds 6 eggs.  
Andrew has 48 eggs.



How many cartons can Andrew fill?

The bar chart shows how children at a primary school travelled to school each morning



How many children travelled to school by **bicycle**?

How many **more** children travelled to school by **walking** than by **train**?

Name: \_\_\_\_\_

Primary 5-a-day

Bronze



4th June

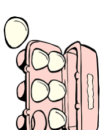
$$379 - 200$$

<input type="text"/>
----------------------

$$75 + 35$$

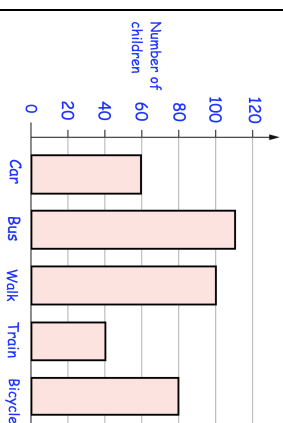
<input type="text"/>
----------------------

Andrew is putting eggs into cartons  
Each carton holds 6 eggs.  
Andrew has 48 eggs.



How many cartons can Andrew fill?

The bar chart shows how children at a primary school travelled to school each morning



How many children travelled to school by **bicycle**?

How many **more** children travelled to school by **walking** than by **train**?