

Name: _____

Primary 5-a-day

Bronze

12th May




$$300 + 300$$

<input type="text"/>

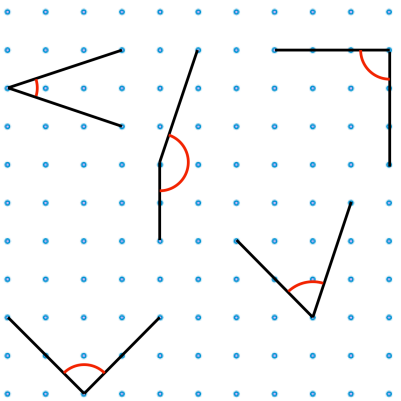
$$4 \times 0$$

<input type="text"/>

How many days are there in January?



Tick the two acute angles



Circle the two right angles

Name: _____

Primary 5-a-day

Bronze

12th May




$$300 + 300$$

<input type="text"/>

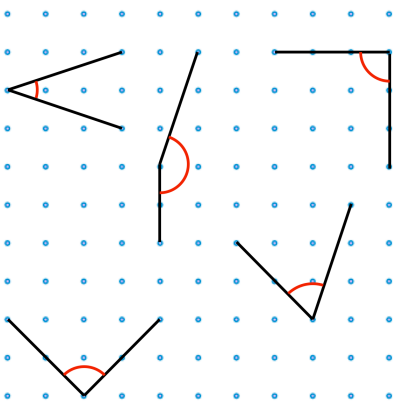
$$4 \times 0$$

<input type="text"/>

How many days are there in January?



Tick the two acute angles



Circle the two right angles