

Name: _____

Primary 5-a-day

Bronze



20th May

$$£17 + £15$$

<input type="text"/>

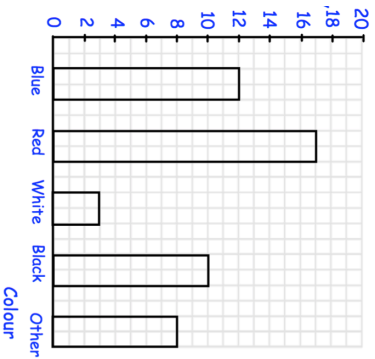
$$4 \times 4$$

<input type="text"/>

Here are the colours of cars in a car park

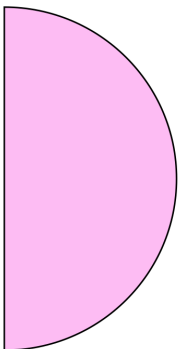
How many **white** cars are there?

Colours of cars in the school car park



How many more **blue** cars than **black** cars are there?

Here is a semi-circle



Measure the length of the straight edge.

Name: _____

Primary 5-a-day

Bronze



20th May

$$£17 + £15$$

<input type="text"/>

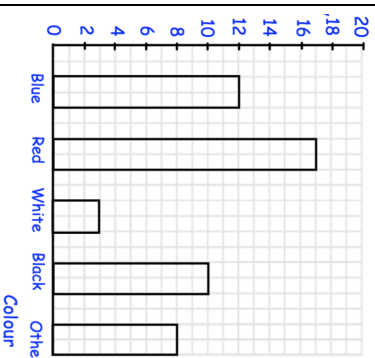
$$4 \times 4$$

<input type="text"/>

Here are the colours of cars in a car park


How many **white** cars are there?

Colours of cars in the school car park



How many more **blue** cars than **black** cars are there?

Here is a semi-circle



Measure the length of the straight edge.