

























22nd May



$40 - 16$ <div style="border: 1px solid black; width: 100px; height: 20px; margin-left: auto; margin-right: auto;"></div>	$6 \times 10 = 20 \times \square$ <div style="border: 1px solid black; width: 100px; height: 20px; margin-left: auto; margin-right: auto;"></div>				
<p>Maddie has a bag of 52 marbles. $\frac{1}{2}$ of the marbles are green. How many marbles are green?</p>	<p>Put these cars in order of price, starting with the highest price.</p>				
<table border="0"> <tr> <td style="border: 1px solid black; padding: 5px;"> A  £3,000 </td> <td style="border: 1px solid black; padding: 5px;"> B  £2,199 </td> </tr> <tr> <td style="border: 1px solid black; padding: 5px;"> C  £3,250 </td> <td style="border: 1px solid black; padding: 5px;"> D  £2,800 </td> </tr> </table>	A  £3,000	B  £2,199	C  £3,250	D  £2,800	
A  £3,000	B  £2,199				
C  £3,250	D  £2,800				
<p>Circle the letter below that has parallel lines</p> <p>C Z T X S</p>					

22nd May



$40 - 16$ <div style="border: 1px solid black; width: 100px; height: 20px; margin-left: auto; margin-right: auto;"></div>	$6 \times 10 = 20 \times \square$ <div style="border: 1px solid black; width: 100px; height: 20px; margin-left: auto; margin-right: auto;"></div>				
<p>Maddie has a bag of 52 marbles. $\frac{1}{2}$ of the marbles are green. How many marbles are green?</p>	<p>Put these cars in order of price, starting with the highest price.</p>				
<table border="0"> <tr> <td style="border: 1px solid black; padding: 5px;"> A  £3,000 </td> <td style="border: 1px solid black; padding: 5px;"> B  £2,199 </td> </tr> <tr> <td style="border: 1px solid black; padding: 5px;"> C  £3,250 </td> <td style="border: 1px solid black; padding: 5px;"> D  £2,800 </td> </tr> </table>	A  £3,000	B  £2,199	C  £3,250	D  £2,800	
A  £3,000	B  £2,199				
C  £3,250	D  £2,800				
<p>Circle the letter below that has parallel lines</p> <p>C Z T X S</p>					