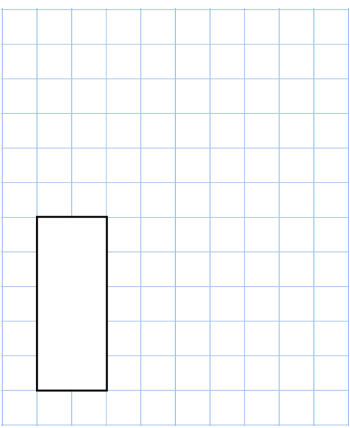
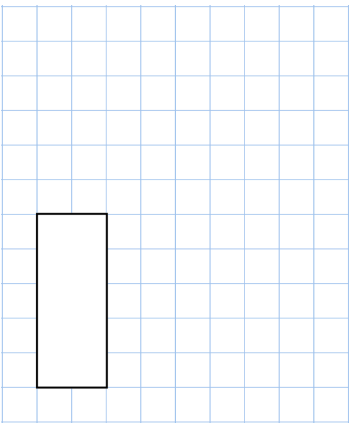





Name: _____

Primary 5-a-day

Bronze



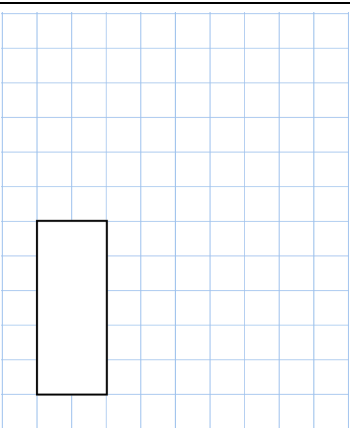
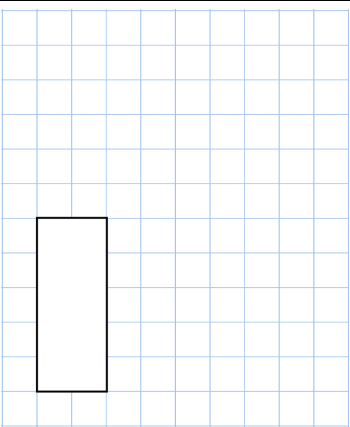


26th May	28 grams + 13 grams
$3 \times 4 \times 0$	
	
<input type="text"/>	<input type="text"/>
Riley has £9 Aiden has £13 more than Riley Eugene has £7 less than Aiden How much money do they have in total?	
Evelyn has nine 5p coins. Alice has twelve 2p coins. How much more money does Evelyn have than Alice?	 
At a rugby match between Clevedon and Bury St Edmunds, there were 781 fans.	

Name: _____

Primary 5-a-day

Bronze



26th May	28 grams + 13 grams
$3 \times 4 \times 0$	
	
<input type="text"/>	<input type="text"/>
Riley has £9 Aiden has £13 more than Riley Eugene has £7 less than Aiden How much money do they have in total?	
Evelyn has nine 5p coins. Alice has twelve 2p coins. How much more money does Evelyn have than Alice?	 
At a rugby match between Clevedon and Bury St Edmunds, there were 781 fans.	