

Name: _____

Primary 5-a-day

Bronze



3rd May

8×3

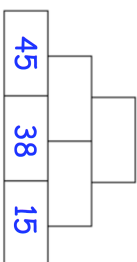
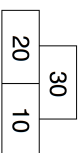
$\frac{1}{3}$ of = 4

Grid with a rectangular box for the answer.

Grid with a rectangular box for the answer.

Below is an addition pyramid.

Find the missing numbers in this addition pyramid




A tray holds 20 flasks.
A school has 8 trays of flasks
How many flasks are there in total?

Here are some number cards

2 4
1 3 5

Use each card once to make the subtraction correct



Name: _____

Primary 5-a-day

Bronze



3rd May

8×3

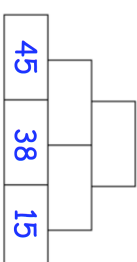
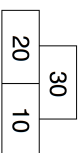
$\frac{1}{3}$ of = 4

Grid with a rectangular box for the answer.

Grid with a rectangular box for the answer.

Below is an addition pyramid.

Find the missing numbers in this addition pyramid



A tray holds 20 flasks.
A school has 8 trays of flasks
How many flasks are there in total?

Here are some number cards

2 4
1 3 5

Use each card once to make the subtraction correct

