

Name: _____

Primary 5-a-day

Bronze



7th May

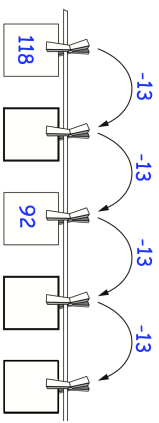
$25 \div 5$

<input type="text"/>

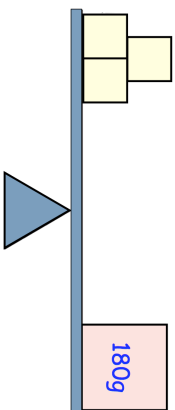
70×3

<input type="text"/>

Write in the missing numbers



How much does one yellow block weigh?



Circle all the numbers that are multiples of four

- 10 22 32 38 44

Name: _____

Primary 5-a-day

Bronze



7th May

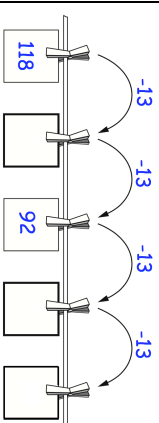
$25 \div 5$

<input type="text"/>

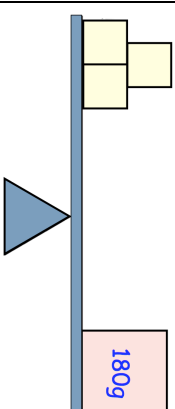
70×3

<input type="text"/>

Write in the missing numbers



How much does one yellow block weigh?



Circle all the numbers that are multiples of four

- 10 22 32 38 44