

Name: _____

Primary 5-a-day

Bronze



11th November

$25 - 19$

<input type="text"/>

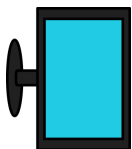
There are 130 televisions in a shop.

The shop sells 52 televisions.

How many televisions are left?

27×4

<input type="text"/>

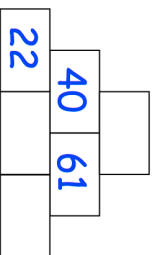


Below is an addition pyramid.

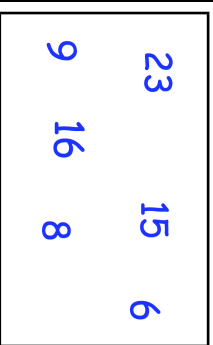
To find the number in a block, add the two blocks below it



Find the missing numbers in this addition pyramid



Circle all the multiples of 4



Name: _____

Primary 5-a-day

Bronze



11th November

$25 - 19$

<input type="text"/>

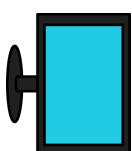
There are 130 televisions in a shop.

The shop sells 52 televisions.

How many televisions are left?


27×4

<input type="text"/>

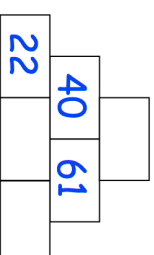


Below is an addition pyramid.

To find the number in a block, add the two blocks below it



Find the missing numbers in this addition pyramid



Circle all the multiples of 4

