

Name: _____

Primary 5-a-day

Bronze

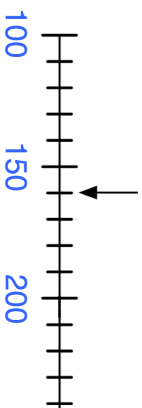
19th November



$$39 + 39$$

$$\begin{array}{r} 13 \\ \times 5 \\ \hline \end{array}$$

What number is the arrow pointing to?

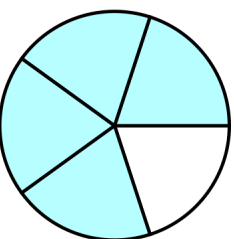


Miss Thomas has 50.

She gives 18 boys and 15 girls a sweet.

How many sweets are left?

Write down what fraction of the circle that is shaded.



Name: _____

Primary 5-a-day

Bronze

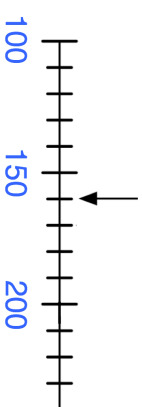
19th November



$$39 + 39$$

$$\begin{array}{r} 13 \\ \times 5 \\ \hline \end{array}$$

What number is the arrow pointing to?



Miss Thomas has 50.

She gives 18 boys and 15 girls a sweet.

How many sweets are left?

Write down what fraction of the circle that is shaded.

