

Name: _____

Primary 5-a-day

Bronze



29th November

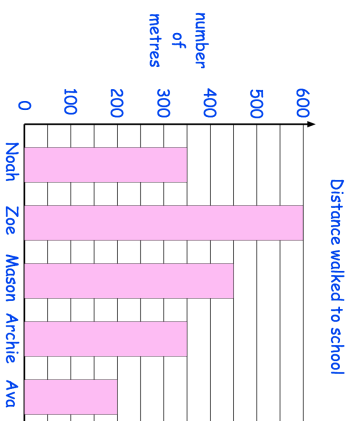
15×1

<input type="text"/>

$3 \overline{) 42}$

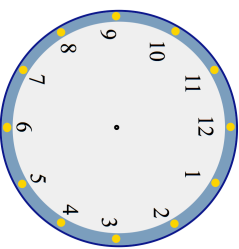
<input type="text"/>

Who walks 200 metres to school?



Who walks **between** 400 and 500 metres to school?

Show the time **half past ten** on the clock



Name: _____

Primary 5-a-day

Bronze



29th November

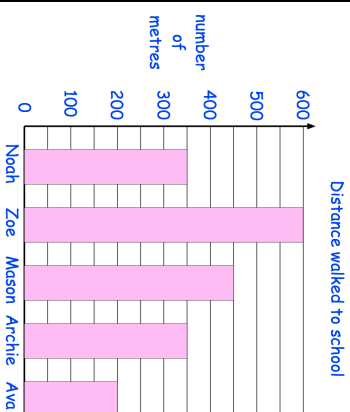
15×1

<input type="text"/>

$3 \overline{) 42}$

<input type="text"/>

Who walks 200 metres to school?



Who walks **between** 400 and 500 metres to school?

Show the time **half past ten** on the clock

