

Name: _____

Primary 5-a-day

Bronze



9th November

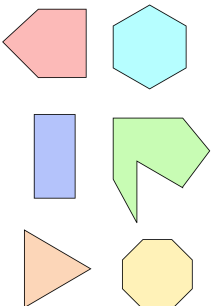
8×5

--

$\frac{1}{4}$ of 20

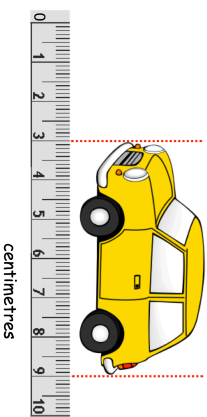
--

Tick the **pentagon**



Here is a model car on a centimeter scale.

How long is the car?



Tegan made a number using these digit cards.



The number is **even** and greater than 400.

What number did Tegan make?

<input type="text"/>	<input type="text"/>	<input type="text"/>
----------------------	----------------------	----------------------

Name: _____

Primary 5-a-day

Bronze



9th November

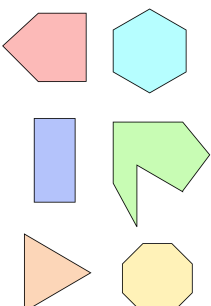
8×5

--

$\frac{1}{4}$ of 20

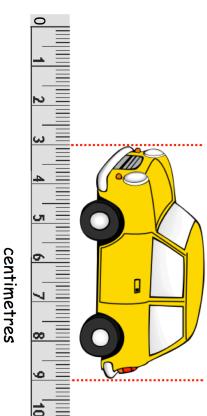
--

Tick the **pentagon**



Here is a model car on a centimeter scale.

How long is the car?



Tegan made a number using these digit cards.



The number is **even** and greater than 400.

What number did Tegan make?

<input type="text"/>	<input type="text"/>	<input type="text"/>
----------------------	----------------------	----------------------