

Name: _____

Primary 5-a-day

Bronze



2nd October

$\frac{1}{2}$ of 50

<input type="text"/>

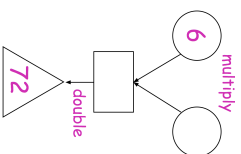
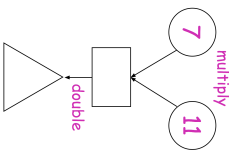
$735 + 200$

<input type="text"/>

In the diagram, the numbers in the circles are multiplied together to make the number in the rectangle.

The number in the triangle is double the number in the rectangle

Complete the two diagrams below



Rosie has 75p.
She has exactly 4 coins.

What coins does she have?

Name: _____

Primary 5-a-day

Bronze



2nd October

$\frac{1}{2}$ of 50

<input type="text"/>

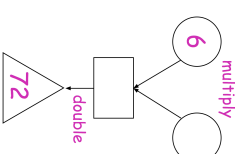
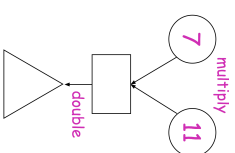
$735 + 200$

<input type="text"/>

In the diagram, the numbers in the circles are multiplied together to make the number in the rectangle.

The number in the triangle is double the number in the rectangle

Complete the two diagrams below



Rosie has 75p.
She has exactly 4 coins.

What coins does she have?